







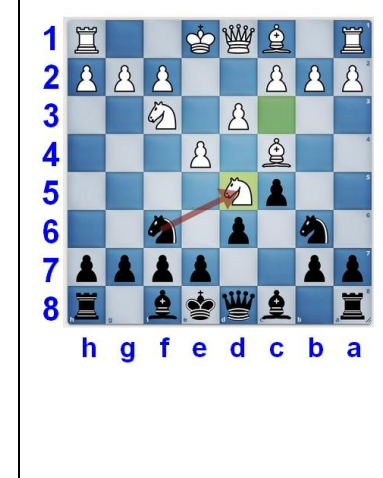



Exercice : coder différents déplacements

Code sous chaque image le déplacement effectué.

 <p>1 2 3 4 5 6 7 8 h g f e d c b a</p>	 <p>1 2 3 4 5 6 7 8 h g f e d c b a</p>	 <p>1 2 3 4 5 6 7 8 h g f e d c b a</p>	 <p>1 2 3 4 5 6 7 8 h g f e d c b a</p>	 <p>1 2 3 4 5 6 7 8 h g f e d c b a</p>
 <p>1 2 3 4 5 6 7 8 h g f e d c b a</p>	 <p>1 2 3 4 5 6 7 8 h g f e d c b a</p>	 <p>1 2 3 4 5 6 7 8 h g f e d c b a</p>	 <p>1 2 3 4 5 6 7 8 h g f e d c b a</p>	 <p>1 2 3 4 5 6 7 8 h g f e d c b a</p>